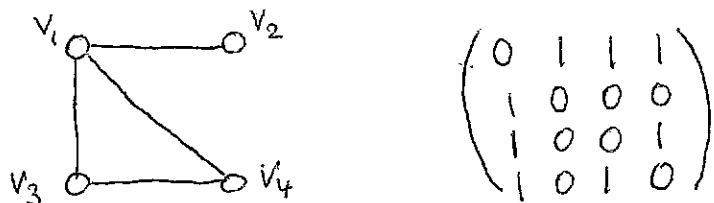


1) [12 marks] In this problem (and only this one) you do not need to justify your answer.

a) Find the adjacency matrix of the graph below.

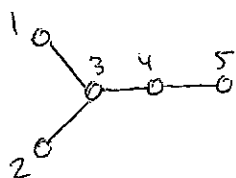


b) What is the number of simple graphs with vertex set $V = \{a, b, c, d, e\}$?

of unordered pairs of distinct vertices is $\binom{5}{2} = 10$

of simple graphs with $V(G) = \{a, b, c, d, e\}$ is $2^{10} = 1024$

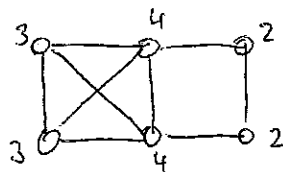
c) Find a simple graph containing a maximal path which does not have maximum length.



132 is a maximal path
it doesn't have maximum length
(the path 1345 is longer)

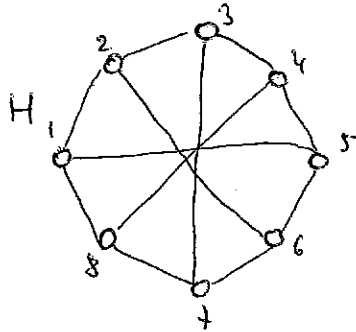
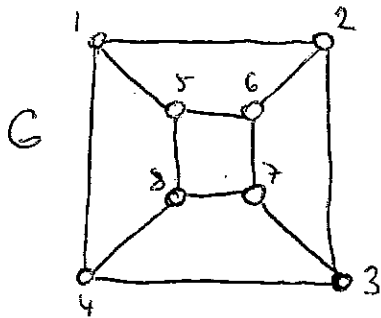
d) Is 2,2,3,4,3,4 a graphic sequence? If the answer is yes, draw a simple graph realizing this sequence.

Yes



(Can be obtained by the method discussed in class, for instance)

2) [8 marks] a) Determine whether the graphs below are isomorphic.

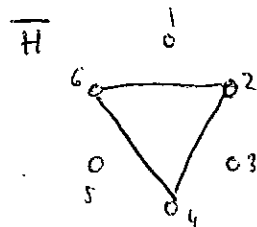
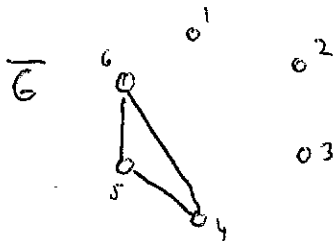
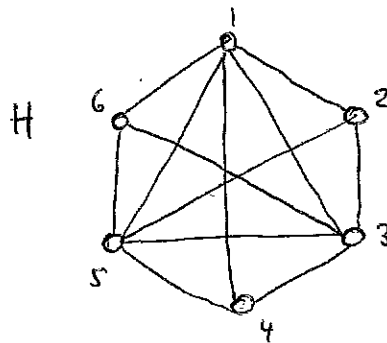
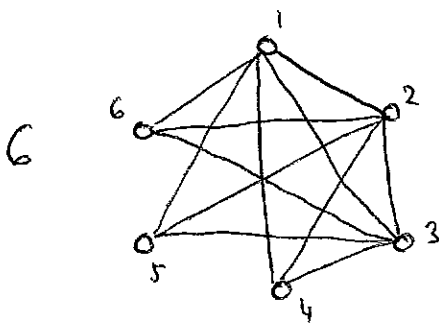


G is bipartite as $\{1, 3, 6, 8\}$ and $\{2, 4, 5, 7\}$ are disjoint independent sets with union $V(G)$

H is not bipartite, as it contains an odd cycle $(1, 2, 3, 4, 5)$

Therefore G is not isomorphic to H

b) Determine whether the graphs below are isomorphic.



$$\bar{G} \cong K_3 + 3K_1$$

$$\tilde{H} \cong K_3 + 3K_1$$

Therefore $\bar{G} \cong \tilde{H}$, so $G \cong H$

(An example of an isomorphism $G \rightarrow H$ is the bijection $f: V(G) \rightarrow V(H)$ defined by $f(1)=1, f(2)=3, f(3)=5, f(4)=4, f(5)=6, f(6)=2$)

3) [24 marks] In the following problems you may use facts proved in class. In this case state the theorem you use (but do not prove it).

a) A graph G has 11 edges and its degree sequence is 3, 1, 4, 4, 4, 4, x . Find x .

Theorem: For every graph G , $\sum_{v \in V(G)} d(v) = 2|E(G)|$

$$3 + 1 + 4 + 4 + 4 + 4 + x = 2 \cdot 11$$

$$x = 2 //$$

b) Does there exist a simple bipartite graph G of girth 7?

Theorem: A graph is bipartite if and only if it has no odd cycle

G has girth 7, so G contains a cycle of length 7, therefore G is not bipartite (using \Rightarrow of the theorem)

c) Does every simple graph with 423 edges contain a bipartite subgraph with 175 edges?

Theorem: Every loopless graph G has a bipartite subgraph with at least $\frac{|E(G)|}{2}$ edges.

YES

By the theorem, a graph with 423 edges contains a bipartite graph with at least 212 edges. By deleting some of them (which does not destroy bipartiteness) we obtain a bipartite subgraph with 175 edges.

d) Determine the values of n such that K_n has a closed trail containing all edges. \rightarrow Eulerian circuit

Theorem: Let G be a connected graph. Then G has an Eulerian circuit if and only if G is even.

K_n is connected. The degree of every vertex is $n-1$, therefore K_n is even iff n is odd.

By the theorem, K_n has an Eulerian circuit iff n is odd.

e) What is the minimum number of trails needed to decompose the Petersen graph?

Theorem: Let G be a connected nontrivial graph with exactly $2k$ odd vertices. The minimum number of trails that decompose G is $\max\{k, 1\}$.

The Petersen graph is connected, nontrivial and has 10 vertices of odd degree (3).

By the theorem, the minimum number of trails that decompose G is $\max\{1, 5\} = 5$.

f) Does there exist a simple graph with 20 vertices and 123 edges which does not contain K_3 as an induced subgraph?

Theorem: The maximum $|E(G)|$ in an n -vertex Δ -free simple graph G is $\lfloor \frac{n^2}{4} \rfloor$.

NO

For $n=20$ the theorem implies that a 20-vertex Δ -free graph has at most $\lfloor \frac{20^2}{4} \rfloor = 100$ edges.

Therefore a graph with 20 vertices and 123 edges contains an induced subgraph isomorphic to Δ .

4) [6 marks] Prove that the complement of a simple disconnected graph must be connected.

See the solutions to the recommended problems.