

NMAG442 Representation Theory of Finite-Dimensional Algebras

Excercise session 6—May 28, 2021

Our goal today is to discuss concrete examples of how reflection functors work and what they do with dimension vectors of representations.

We work over an algebraically closed k and with finite-dimensional modules.

Reflection functors

Definition 1 (Reflections; section 3.2 in [1]). *Let Q be a quiver. The reflection with respect to a vertex $i \in Q_0$ is by definition the map:*

$$\sigma_i : \mathbb{Z}^n \rightarrow \mathbb{Z}^n \text{ with } \sigma_i(x) = x - \frac{2(x, e_i)_Q}{(e_i, e_i)_Q} e_i$$

where e_i is the i th coordinate vector.

Recall that $(x, y)_Q = q_Q(x + y) - q_Q(x) - q_Q(y)$ where:

$$q_Q(x) = \sum_{i \in Q_0} x_i^2 - \sum_{\alpha: i \rightarrow j \in Q_1} x_i x_j$$

is the associated quadratic form.

Definition 2 (Reflection functors on objects; section 3.3 in [1]). *Let Q be a quiver, and let $i \in Q_0$ be a sink. We define a functor $S_i^+ : \text{Rep}(Q, k) \rightarrow \text{Rep}(\sigma_i Q, k)$ where $\sigma_i Q$ has the same vertices and arrows as Q , but for all $e \in Q_1$ with $t_Q(e) = i$ we set $t_{\sigma_i Q}(e) = s_Q(e)$ and $s_{\sigma_i Q}(e) = i$.*

We define $S_i^+(X)$ as follows:

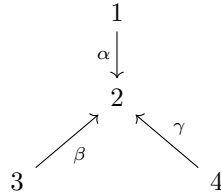
- (i) *For $j \in Q_0$ such that $i \neq j$, we set $S_i^+(X)_j = X_j$.*
- (ii) *For $\alpha \in Q_1$ such that $t_Q(\alpha) \neq i$, we set $S_i^+(X)_\alpha = X_\alpha$.*
- (iii) *The vector space $S_i^+(X)_i$ and maps $S_i^+(X)_\alpha$ for arrows ending in i in Q are given by the following exact sequence:*

$$0 \longrightarrow S_i^+(X)_i \xrightarrow{[S_i^+(X_\alpha)]^T} \bigoplus_{\alpha: j \rightarrow i \in Q_1} X_j \xrightarrow{[X_\alpha]} X_i$$

Proposition 3 (Part of Lemma 3.3.3 in [1]). *Let Q be a quiver, and let $i \in Q_0$ be a sink. Given X an indecomposable representation of Q , the followign are equivalent:*

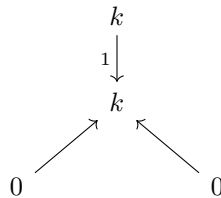
- (i) $X \cong S(i)$;
- (ii) $S_i^+(X)$ is non-zero indecomposable;
- (iii) $\sigma(\underline{\dim} X) = \underline{\dim} S_i^+(X)$.

We will work with the following quiver Q :



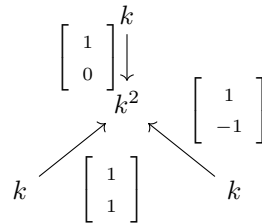
Note that its underlying graph is the Dynkin diagram D_3 .

Exercise 1. Given the representation $P(1)$:



Calculate $\sigma_2(\underline{\dim} P(1))$ and $S_2^+(P(1))$, and then iterate with sinks 1, 3, and 4.

Exercise 2. Given the representation X :



Calculate $\sigma_2(\underline{\dim} X)$ and $S_2^+(X)$, and then iterate with sinks 1, 3, and 4. The representation X is indecomposable assuming that $\text{char } k \neq 2$. This was proved at the last session.

References

- [1] KRAUSE, H. Representations of quivers via reflection functors. *arXiv preprint arXiv:0804.1428* (2008).

Feel free to reach me at jakub.kopriva@mff.cuni.cz. Also, I am available for short consultations on problems from the exercise sessions after previous arrangement via e-mail.